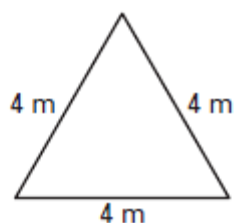


# TARGET 4A

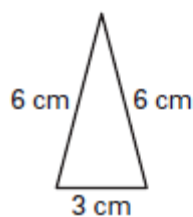
Name \_\_\_\_\_ Date \_\_\_\_\_

**Classify the triangle by its sides.**

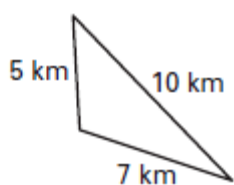
1.



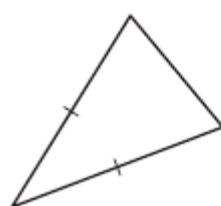
2.



3.



4.

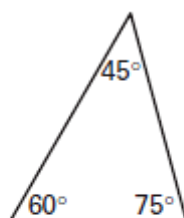


**Classify the triangle by its angles.**

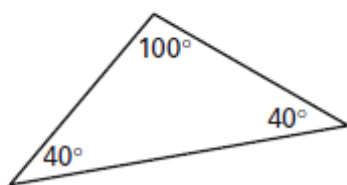
5.



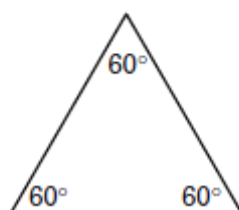
6.



7.

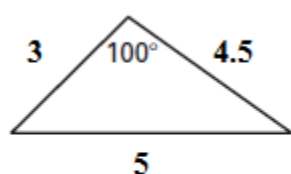


8.

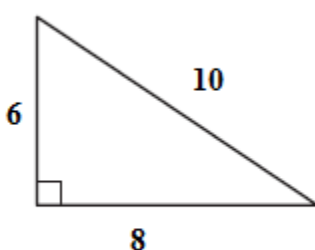


**Classify the triangle by its sides and by its angles.**

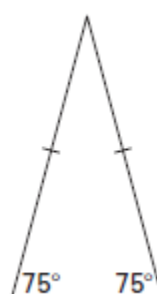
9)



10)



11)



## TARGET 4A ANSWERS

- 1) equilateral
- 2) isosceles
- 3) scalene
- 4) isosceles
- 5) right
- 6) acute
- 7) obtuse
- 8) equilateral
- 9) scalene and obtuse
- 10) scalene and right
- 11) isosceles and acute